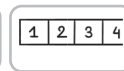
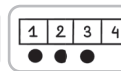


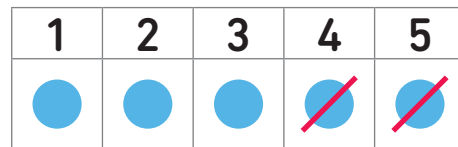
L'ADDITION ET LA SOUSTRACTION



1 Calcule.



$$2 + 3 = \dots 5 \dots$$



$$5 - 2 = \dots 3 \dots$$



2 Colorie en vert les signes + et en rouge les signes -.

Calcule.

$$4 + 1 = \dots 5 \dots$$

$$2 + 1 = \dots 3 \dots$$

$$3 - 1 = \dots 2 \dots$$

$$5 - 1 = \dots 4 \dots$$

$$0 + 5 = \dots 5 \dots$$

$$2 - 2 = \dots 0 \dots$$



Calcule.

$$8 + 2 = \textcolor{green}{10}..$$

$$7 - 6 = \textcolor{green}{1}....$$

$$10 - 4 = \textcolor{green}{6}....$$

$$1 + 9 = \textcolor{green}{10}....$$

$$6 + 3 = \textcolor{green}{9}....$$

$$9 - 5 = \textcolor{green}{4}....$$