

2

LES NOMBRES JUSQU'À 5



1 Écris les nombres pour compléter les files numériques:



à l'endroit




à l'envers



2 Écris le nombre de formes.




5



2



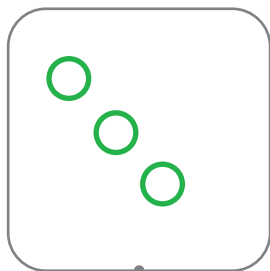
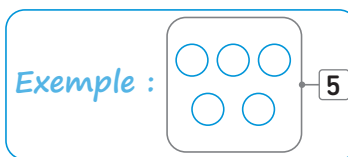
1




3




3 Dessine le nombre de jetons demandé.



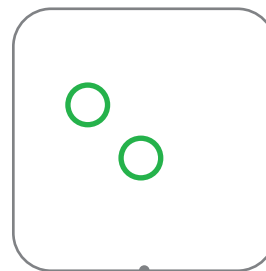
3



1



4



2



Relie.

deux

un

cinq

trois

quatre

1

2

3

4

5

