

REPRÉSENTER UNE FRACTION

1 Colorie la partie de chaque figure correspondant à la fraction demandée.

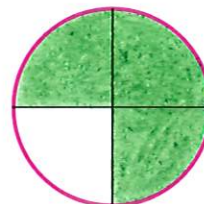
$$\frac{6}{10}$$




$$\frac{1}{2}$$




$$\frac{3}{4}$$



$$\frac{6}{8}$$



$$\frac{2}{4}$$

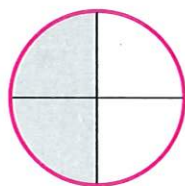


$$\frac{1}{5}$$



2 Écris la fraction qui correspond à chaque partie grisée.


$$\frac{2}{4}$$



$$\frac{3}{5}$$




$$\frac{1}{4}$$



$$\frac{3}{8}$$




$$\frac{2}{6}$$



$$\frac{4}{10}$$



$$\frac{1}{2}$$



$$\frac{2}{8}$$





Colorie la partie de chaque figure correspondant à la fraction demandée.

