

## LES CENTAINES (2)

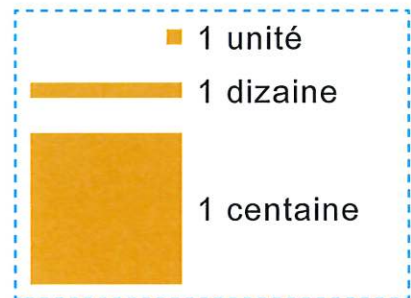
## 1 Écris les nombres en chiffres.

2 centaines = 2006 dizaines = 609 centaines = 90058 unités = 5810 dizaines = 10017 dizaines = 170


## 2 Complète.

 $300 + 40 + 7 =$  347 $700 + 1 + 90 =$  791 $30 + 200 + 8 =$  238 $80 + 500 + 6 =$  586 $2 + 50 + 400 =$  452 $4 + 900 =$  904

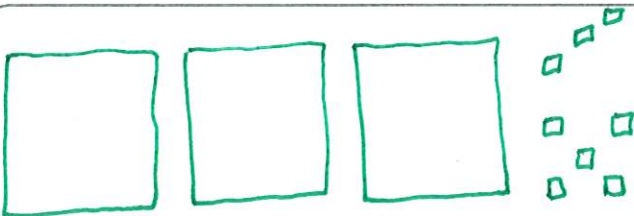
## 3 Dessine les centaines, dizaines restantes et unités restantes de ces nombres.




231



308



164





Écris les nombres en chiffres.

$$2c \ 5d \ 34u = \dots 284 \dots$$

$$609u = \dots 609 \dots$$

$$7d \ 12u \ 3c = \dots 382 \dots$$

$$5c \ 24u = \dots 524 \dots$$

$$10d \ 28u = \dots 128 \dots$$

$$73d = \dots 730 \dots$$